


Name: \_\_\_\_\_

Directions: Barney's Christmas Tree Farm recorded the number of trees they sold this week. Below is a pictograph of their data. Use the graph to answer the questions.



# PICTURE GRAPHS & TREES

due 11/30



How many total trees did Barney's Christmas Tree Farm sell this week?  
\_\_\_\_\_

On what day(s) did Barney's Christmas Tree Farm sell the most trees?  
\_\_\_\_\_

On what day did the tree farm sell the least amount of trees?  
\_\_\_\_\_

On what two days did the tree farm sell exactly 30 trees?  
\_\_\_\_\_

How many more trees were sold on Tuesday than Wednesday?  
\_\_\_\_\_


How many trees were sold over the weekend (Friday-Sunday)?  
\_\_\_\_\_

BONUS: If each tree costs \$5.00, how much money did Barney's Christmas Tree Farm make this week?  
\_\_\_\_\_

Name: \_\_\_\_\_


# CHRISTMAS CONTEXT

Directions: Use context clues to determine the meaning of each underlined word. Then underline the clues that helped you.



The streets of New York are bustling with people during the Christmas season. Everyone loves to visit the city to see the Rockefeller tree and store decorations. The streets get really crowded.

- a. Dancing    b. Empty    c. Busy



I had the most idyllic winter break this year. My entire family was together, we went sledding, and baked cookies. It was a perfect week at home and I loved each moment.

- a. Perfect    b. Boring    c. Adventurous



It is hard to get a gift for my brother. I don't want to get him a meaningless gift, like socks. I want to get him something that has meaning and shows him I care. It is hard to find the right gift.

- a. Cheap    b. Pointless    c. Important



My sister never wants to do anything with me. I had to plead with her to bake Christmas cookies together. She is a teenager and always just wants to be with her friends.

- a. Leave    b. Beg    c. Refuse



I went to see my friends Christmas tree and it was exquisite. It was so magnificent. The ornaments were so colorful and the lights were so bright. It was the prettiest tree I had ever seen.

- a. Beautiful    b. Bland    c. Regular



Last night, I swear I saw Santa and his reindeer soaring through the sky. They were flying through the sky like an airplane and then in a second, they were gone!

- a. Landing    b. Jumping    c. Flying

# Honoring Heroes

## Read about Washington, D.C.

Then, answer the questions on the next page.

Washington, D.C., is the capital of the United States. It is located between Virginia and Maryland on the Potomac River. Washington, D.C., is also the headquarters of the federal government. This incredible city is a symbol of United States history and the home of many of the country's important historical landmarks.


Many of Washington, D.C.'s, famous landmarks are located on the National Mall. The Mall is a long, narrow, parklike area with large open spaces in the middle of the city. It is home to the White House, and the U.S. Capitol, where Congress meets. The Mall is also dedicated to honoring the history of the United States. Memorials for presidents George Washington, Abraham Lincoln, Thomas Jefferson, and Franklin D. Roosevelt can all be found on the Mall. There are also memorials honoring Americans who fought in the Korean and Vietnam Wars.

Near the Lincoln Memorial is another memorial. It is the National World War II Memorial. This memorial honors Americans who fought and supported the United States during World War II. The U.S. fought in this war from 1941 to 1945. The memorial features a Rainbow Pool, two giant arches, a ring of stone columns, and a wall covered with gold stars. Each star represents 100 Americans who died while fighting in World War II.

Bob Dole, a former senator and World War II veteran, worked tirelessly to get this memorial built. He said that the memorial would remind Americans of the value of freedom. "Freedom is not free," says Dole. "It must be earned . . ."

More than \$190 million was raised to build the memorial. Many businesses, private groups, and schools donated money to this cause. The memorial was completed in 2004.

Details in a story give information about the main idea and help the reader better understand the story.



1 Where is Washington, D.C., located? \_\_\_\_\_

2 Write three facts about Washington, D.C. \_\_\_\_\_

3 Which four presidents are memorialized on the National Mall?

4 Besides the four presidents, who else is honored on the Mall?

5 What is the name of the World War II memorial?

6 Why was it built? \_\_\_\_\_

7 How long did the United States fight in World War II? \_\_\_\_\_

8 What are some features of the 2004 memorial? \_\_\_\_\_

9 What World War II veteran worked hard to get the memorial built? \_\_\_\_\_

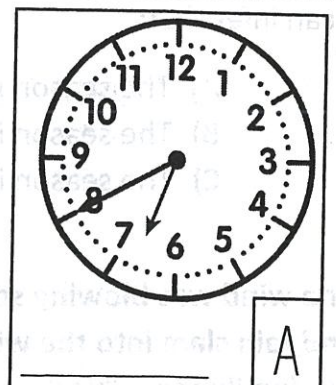
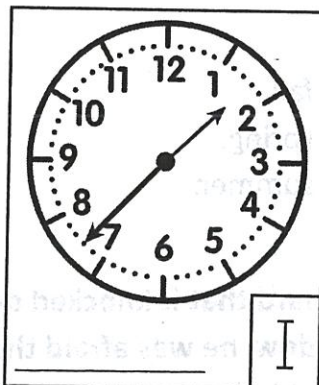
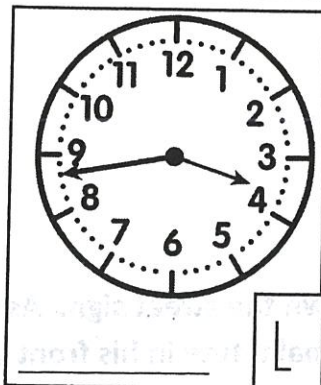

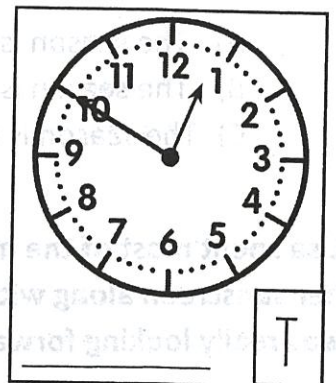
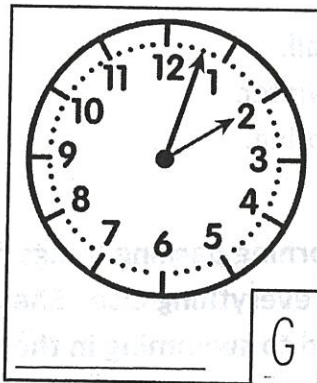
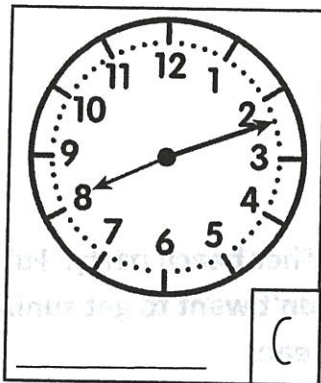
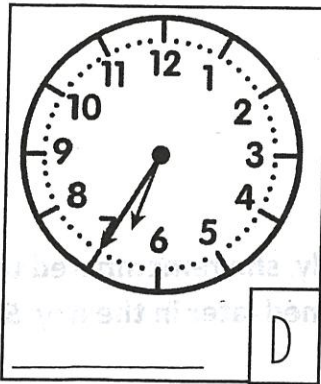
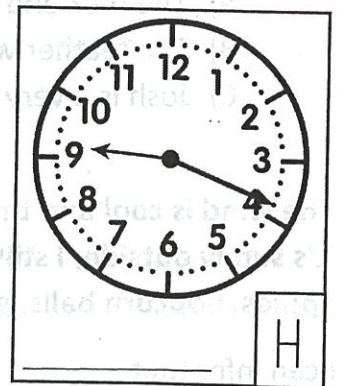
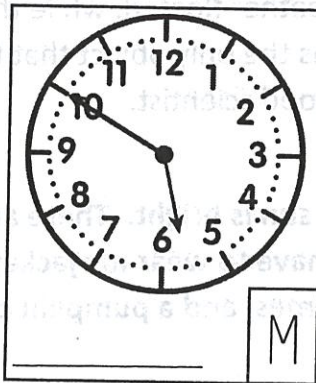
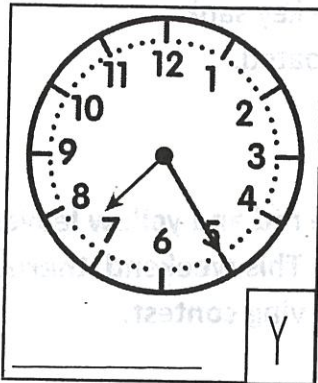
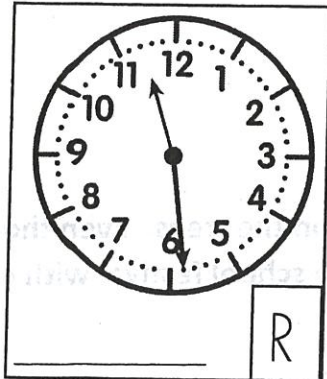
10 What remembrance did Dole say the memorial would bring to the minds of people?

Name: \_\_\_\_\_

Directions: Write the time to the nearest minute. Then use your answers to solve the Christmas riddle.

# THE MOST WONDERFUL TIME

RIDDLE: You sometimes see them on a house, and often on a festive tree. They're often multicolored and run on electricity. What is it?



\_\_\_\_\_

\_\_\_\_\_

\_\_\_\_\_

\_\_\_\_\_

\_\_\_\_\_

\_\_\_\_\_

\_\_\_\_\_

\_\_\_\_\_

\_\_\_\_\_

\_\_\_\_\_


\_\_\_\_\_

\_\_\_\_\_

\_\_\_\_\_

\_\_\_\_\_

\_\_\_\_\_



Name: \_\_\_\_\_

# Cause & Effect

Write the cause and effect for each sentence.

1. Tim forgot his math book, so he was unable to complete his homework.

**Cause:** \_\_\_\_\_

**Effect:** \_\_\_\_\_

2. Keegan was hungry because he skipped lunch.

**Cause:** \_\_\_\_\_

**Effect:** \_\_\_\_\_

3. Erin's car had a flat tire, so she called a tow truck.

**Cause:** \_\_\_\_\_

**Effect:** \_\_\_\_\_

4. Gina couldn't find the cookies because Papa hid them in the cupboard.

**Cause:** \_\_\_\_\_

**Effect:** \_\_\_\_\_

5. Kelly studied her spelling words and she got an A on the test.

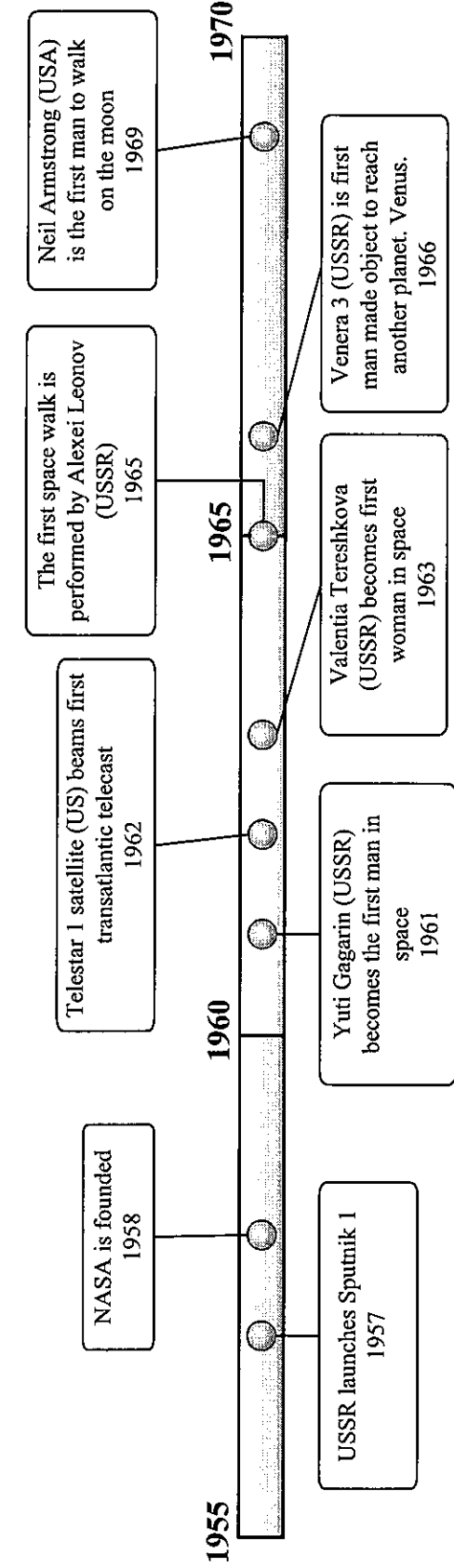
**Cause:** \_\_\_\_\_

**Effect:** \_\_\_\_\_



Use the timeline to answer the questions.

The Space Race




1. \_\_\_\_\_
2. \_\_\_\_\_
3. \_\_\_\_\_
4. \_\_\_\_\_
5. \_\_\_\_\_
6. \_\_\_\_\_
7. \_\_\_\_\_
8. \_\_\_\_\_
9. Use Line
10. Use Line

- 1) Which happened earlier? A. NASA was founded or B. USSR launches Sputnik 1 \_\_\_\_\_
- 2) How many years after Sputnik 1 was launched did Yuri Gagarin become the first man in space? \_\_\_\_\_
- 3) What year did Neil Armstrong walk on the moon? \_\_\_\_\_
- 4) What year was the first transatlantic telecast? \_\_\_\_\_
- 5) What is the span (number of years shown) of this timeline? \_\_\_\_\_
- 6) What year did Venera 3 reach Venus? \_\_\_\_\_
- 7) What year was the first space walk? \_\_\_\_\_
- 8) Sally K. Ride became the first U.S. woman in space in 1983. Could you put this event on the timeline above? ( Yes / No ) \_\_\_\_\_
- 9) What is this timeline about? \_\_\_\_\_
- 10) What event happened in 1963? \_\_\_\_\_


# A-Mazing Eighteen

Add. Find the path that leads from the mouse to the cheese by following the sums of 18.

The answer to an addition problem is called the sum.



$(5 + 4) + (3 + 6)$	$(7 + 6) + 5$	$(5 + 6) + (4 + 2)$	$(7 + 5) + 7$	$3 + (7 + 5)$
$4 + (6 + 6)$	$3 + (8 + 7)$	$(5 + 3) + (3 + 4)$	$(4 + 6) + 5$	$(5 + 9) + 3$
$(9 + 2) + 6$	$(5 + 3) + (6 + 4)$	$2 + (8 + 8)$	$8 + (6 + 2)$	$(4 + 5) + (2 + 5)$
$5 + (6 + 6)$	$(6 + 6) + (4 + 6)$	$(2 + 3) + (9 + 4)$	$3 + (7 + 5)$	$(6 + 7) + 6$
$(7 + 8) + 2$	$5 + (4 + 6)$	$7 + (4 + 7)$	$(5 + 6) + (4 + 3)$	$(8 + 4) + 6$



Write another number sentence with 18 as the sum. Do not use a number sentence from above.



# Cross-Number Puzzle

Subtract. Complete the puzzle.

## Across

2. 
$$\begin{array}{r} 3,016 \\ - 1,209 \\ \hline \end{array}$$

6. 
$$\begin{array}{r} 246,342 \\ - 156,129 \\ \hline \end{array}$$


8. 
$$\begin{array}{r} 64,293 \\ - 28,318 \\ \hline \end{array}$$

9. 
$$\begin{array}{r} 5,249 \\ - 3,928 \\ \hline \end{array}$$

10. 
$$\begin{array}{r} 36,425 \\ - 18,929 \\ \hline \end{array}$$

11. 
$$\begin{array}{r} 5,264 \\ - 3,192 \\ \hline \end{array}$$

12. 
$$\begin{array}{r} 818,462 \\ - 131,910 \\ \hline \end{array}$$



## Down

14. 
$$\begin{array}{r} 3,642 \\ - 1,813 \\ \hline \end{array}$$

1. 
$$\begin{array}{r} 6,429 \\ - 3,298 \\ \hline \end{array}$$

3. 
$$\begin{array}{r} 9,145 \\ - 2,189 \\ \hline \end{array}$$

4. 
$$\begin{array}{r} 9,142 \\ - 1,381 \\ \hline \end{array}$$

5. 
$$\begin{array}{r} 58,142 \\ - 13,098 \\ \hline \end{array}$$

15. 
$$\begin{array}{r} 7,645 \\ - 1,328 \\ \hline \end{array}$$

7. 
$$\begin{array}{r} 76,418 \\ - 39,291 \\ \hline \end{array}$$

10. 
$$\begin{array}{r} 31,642 \\ - 18,945 \\ \hline \end{array}$$

13. 
$$\begin{array}{r} 814,603 \\ - 148,231 \\ \hline \end{array}$$