

NAME \_\_\_\_\_ DATE \_\_\_\_\_

# WORD LOOK




## Directions

Look at the words in the box, and then answer the questions below.

rainbow      write      eleven      thorough      cauliflower

1. Which word contains all the vowels? \_\_\_\_\_
2. Which word is made up of two smaller words? \_\_\_\_\_
3. Which word has an "i" as its middle letter? \_\_\_\_\_
4. Which word has only one vowel that is used three times? \_\_\_\_\_
5. Which of the words would come first in a dictionary? \_\_\_\_\_
6. Which of the words would come last in a dictionary? \_\_\_\_\_
7. Which word begins with two consonants and ends with two consonants? \_\_\_\_\_
8. Which word has eight letters? \_\_\_\_\_
9. Which word has the most consonants? \_\_\_\_\_

LIVELY LANGUAGE ARTS



# There Vs. Their Vs. They're

Draw a line from the word on the left to the correct definition on the right.

Their	<i>theɪr</i>	Place or position
They're	<i>(They are)</i>	Possessive form, modifies a noun
There	<i>there</i>	Contraction

Complete the sentences using "there", "their" or "they're".

- 1.) \_\_\_\_\_ are millions of stars in the sky.
- 2.) Mom and dad are very proud of \_\_\_\_\_ children.
- 3.) The milk is over \_\_\_\_\_ on the counter.
- 4.) When dad gets home, \_\_\_\_\_ going to the store.
- 5.) The dogs were very happy to play with \_\_\_\_\_ toys.
- 6.) Sally thinks \_\_\_\_\_ will be apple pie for dessert.
- 7.) \_\_\_\_\_ hoping \_\_\_\_\_ is whipped cream too.
- 8.) Johnny says \_\_\_\_\_ is plenty of room to sit down.
- 9.) \_\_\_\_\_ jackets match to promote team spirit.
- 10.) The game is on Saturday but \_\_\_\_\_ not all going.
- 11.) The team knows \_\_\_\_\_ going to win.
- 12.) Sally and Johnny do not want to share \_\_\_\_\_ dessert.

# America's First People

Native Americans lived in North and South America long before Europeans arrived. Their many tribal nations were spread throughout the two continents. The cultures, languages, and ways of life often differed by region. For example, the Indigenous peoples in the woodlands along the eastern coast of North America had a very different lifestyle than those who lived in the drier areas of the southwest.

The woodland nations inhabited the eastern half of what is now the United States. Their lands stretched from the Canadian border in the north to the Gulf Coast in the south. They also extended east and west from the Atlantic Ocean all the way to the Mississippi River. The northern parts of this area had cold winters, but the whole region had warm summers. The Haudenosaunee, Wampanoag, Cherokee, and Chickasaw are just a few of the many tribal nations that lived in the east.


The Indigenous people of the southwest lived in a warm and dry region that covered a large area of the continent, which now makes up Arizona, New Mexico, southern Colorado, and northern Mexico. These areas were home to many tribal nations such as the Apache, Navajo (Diné), and Pueblo.

Housing was very different in these two different regions. Those in the east built a variety of homes, depending on their location. Northeastern nations lived in dome-shaped wigwams covered with sheets of bark or in longhouses. A longhouse was a large, rectangular shelter that was home to several related families, each living in its own section. Southeastern nations often built villages around a central public square where community events took place.

Southwestern nations lived in cliff houses or large, many-storied homes built from rock and a mud-like substance called adobe. These adobe dwellings could house many families.

Although there were many differences between the southwestern and eastern tribal nations, they both ate a lot of corn, beans, and squash. Hunting was important in both regions, although fishing was more significant in the east.

To compare and contrast ideas in a passage, determine how the ideas are alike and how they are different.

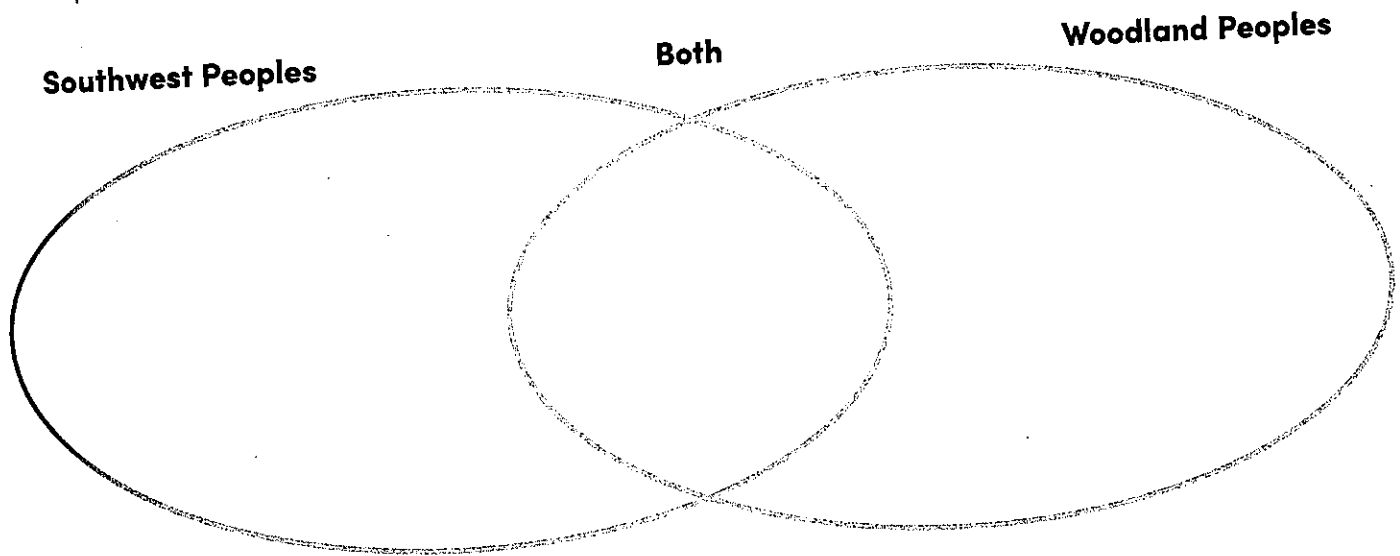


The tribal nations in both regions were excellent craftspeople. Those in the east made pottery, wicker baskets, and deerskin clothing. Those in the southwest made pottery, too. They were also skilled at spinning cotton and weaving it into cloth. This cloth was made into clothing. Life for the Indigenous peoples of the eastern woodland and of the southwest may be different today than it was in the past, but learning about their incredible history is important.

1 Fill in the Venn diagram using the descriptions below.

wigwams and longhouses  
made pottery  
hunting  
many-storied homes  
corn, beans, and squash  
fishing  
Apache, Navajo (Diné), Pueblo

excellent craftspeople  
cold winters, warm summers  
warm and dry  
Arizona, New Mexico, and southern Colorado,  
and northern Mexico  
Canadian border to the Gulf Coast  
Haudenosaunee, Wampanoag, Cherokee, Chickasaw



2 Circle the ways longhouses and adobe homes were alike.

large      one-family dwellings      fairly small      multiple-family dwellings

3 How was the climate in certain parts of the eastern woodlands different from other parts

in the same region? \_\_\_\_\_

\_\_\_\_\_

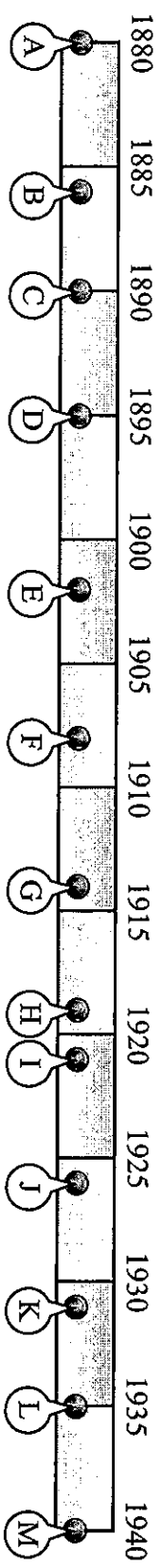
\_\_\_\_\_



Determine which letter best represents the location the event should occur on the timeline. Not all letters will be used.

**Answers**

**Advances in Automobiles**



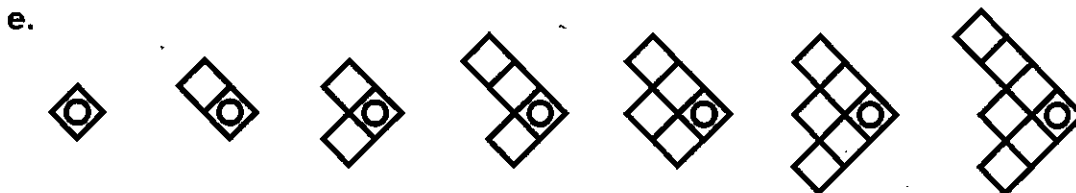
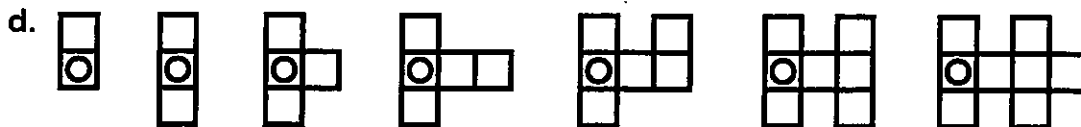
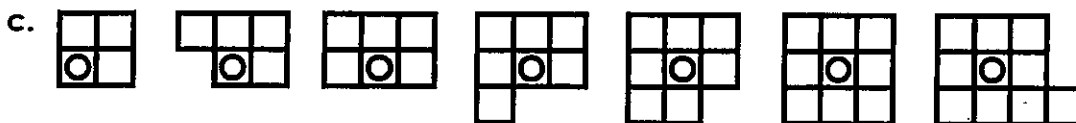
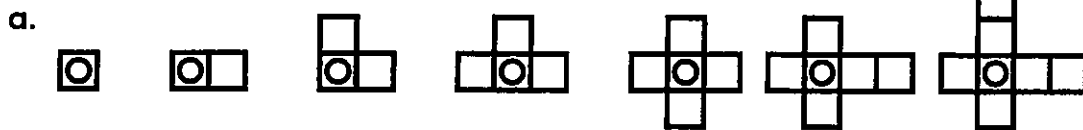
- 1) Henry ford begins making the model T. (1908)
- 2) First car body made entirely with steel. (1914)
- 3) Karl Pabst creates the jeep. (1940)
- 4) Karl Benz creates the first practical automobile. (1880)
- 5) The first electric starter is introduced on the 'Arnold' automobile. (1895)
- 6) Hydraulic brakes are invented by Malcolm Loughead (co-founder of lockheed). (1919)
- 7) Drum brakes are introduced by Renault. (1902)
- 8) The first motorcycle is created by Gottlieb Daimler and Wilhelm Maybach. (1886)
- 9) Turn signals begin appearing on cars. (1935)
- 10) First power steering system is introduced. (1926)

1. \_\_\_\_\_
2. \_\_\_\_\_
3. \_\_\_\_\_
4. \_\_\_\_\_
5. \_\_\_\_\_
6. \_\_\_\_\_
7. \_\_\_\_\_
8. \_\_\_\_\_
9. \_\_\_\_\_
10. \_\_\_\_\_

Name: \_\_\_\_\_

## Repeating Patterns

Look at each row of shapes. Draw the next shape in the pattern.



Name: \_\_\_\_\_

## Special Number

The special number is

# 2,107,954

**even****odd**

The value of the digit 0 is \_\_\_\_\_.

The value of the digit 2 is \_\_\_\_\_.

The value of the digit 9 is \_\_\_\_\_.

The value of the digit 7 is \_\_\_\_\_.

The value of the digit 4 is \_\_\_\_\_.

Fill in the empty boxes on the number line.



Write the number in expanded form.

\_\_\_\_\_ + \_\_\_\_\_ + \_\_\_\_\_ + \_\_\_\_\_ + \_\_\_\_\_

1 less than 2,107,954 is \_\_\_\_\_.

100,000 more than 2,107,954 is \_\_\_\_\_.

1,000 less than 2,107,954 is \_\_\_\_\_.

10 more than 2,107,954 is \_\_\_\_\_.

1,000,000 less than 2,107,954 is \_\_\_\_\_.


Compare. &lt;, &gt;, or =

2,170,954  2,107,9542,107,945  2,107,9542,107,954  2,954,1072,107,459  2,107,954

Name: \_\_\_\_\_

Prin

## Multiple-Step Math Questions



- a. Grace started her own landscaping business. She charges \$6 an hour for mowing lawns and \$11 per hour for pulling weeds. In September she mowed lawns for 63 hours and pulled weeds for 9 hours. How much money did she earn in September?

Show your work.

answer: \_\_\_\_\_

- b. Harvey wants to buy a gift for his father that costs \$35.92 and a gift for his sister that costs \$52.08. He has saved \$16.28. How much more does he need to save in order to buy the gifts?

Show your work.

answer: \_\_\_\_\_

- c. On Monday, there was no snow on the ground in Buffalo, New York. On Tuesday, three inches of snow fell. On Wednesday, a half an inch of snow melted. On Thursday, two and a half more inches fell. On Friday, another inch and a half melted. How much snow was left on the ground Friday night?

Show your work and label your answer.

answer: \_\_\_\_\_

- d. Faith had \$100. She went to the grocery store and bought three gallons of ice cream for \$7.29 each. Then she went to the farmer's market and bought two dozen ears of corn for \$5/dozen. How much money did Faith have left?

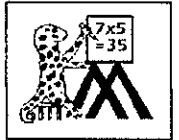
Show your work.

answer: \_\_\_\_\_



Name

Date



# CHRISTMAS BLOCK COORDINATES 5

20									
19									
18									
17									
16									
15									
14									
13									
12									
11									
10									
9									
8									
7									
6									
5									
4									
3									
2									
1									
0									
	A	B	C	D	E	F	G	H	I

### ORANGE

B11, B12, B13, B14, C13, C14, D1, D3, D4, D6, D7, D8, D9, D10, D11, D12, D13, D14, E1, E2, E4, E5, E7, E8, E9, E10, E11, E12, E13, E14, F2, F3, F5, F6, F8, G3, G4, G6, H4, H5, I5

### LIGHT BLUE

F12, F13, G10, G11, G12, G13, G14, H8, H9, H10, H11, H12, H13, H14, H15, H16, I7, I8, I16, I17

### YELLOW

D18, D20, E17, E18, E20, F15, F16, F17, F18, F20, G15

D2, D5, E3, E6, F4, F7, G5

### PINK

A14, D16, D17, E15, E16

